


Name _____

I know my shapes!



This is a _____.

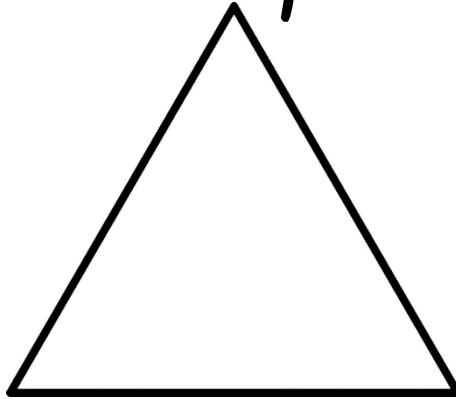
A circle has _____ sides and
_____ points.

I can draw 2 circles:

A large, empty rectangular box with a black border, intended for a student to draw two circles.

Name _____

I know my shapes!



This is a _____.


A triangle has _____ sides and
_____ points.

I can draw 2 triangles:

A large, empty rectangular box with a black border, intended for the student to draw two triangles. It occupies the lower third of the page.

Name _____


I know my shapes!



This is a _____.

A square has _____ sides and
_____ points.

I can draw 2 squares:



Name _____

I know my shapes!



This is a _____.

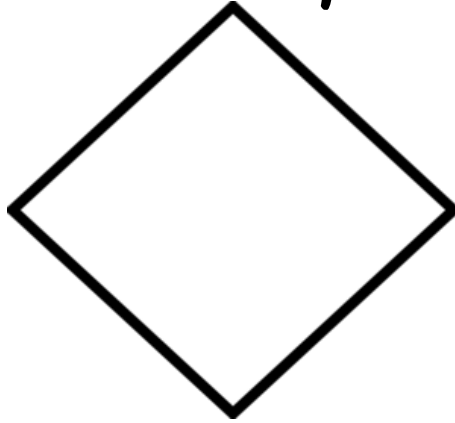
A rectangle has _____ sides
and _____ points.

I can draw 2 rectangles:



Name _____

I know my shapes!



This is a _____.

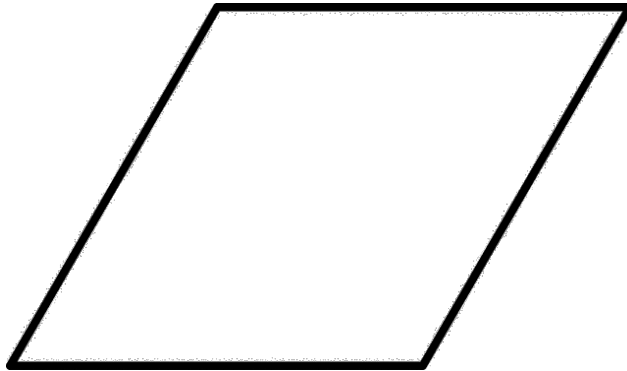
A diamond has _____ sides and
_____ points.

I can draw 2 diamonds:

A large, empty rectangular box with a black border, intended for the student to draw two diamonds as instructed in the text above.

Name _____

I know my shapes!



This is a _____.

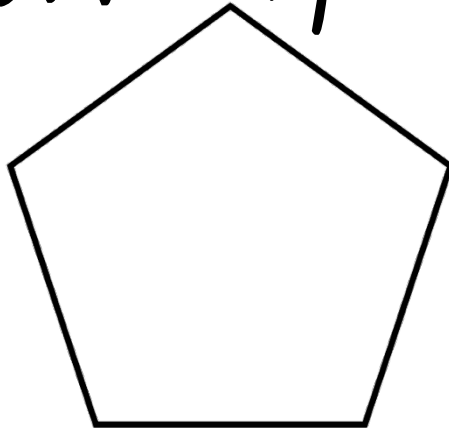
A rhombus has _____ sides
and _____ points.

I can draw 2 rhombuses:



Name _____

I know my shapes!



This is a _____.

A pentagon has _____ sides
and _____ points.

I can draw 2 pentagons:



Name _____

I know my shapes!



This is a _____.


A star has _____ sides and
_____ points.

I can draw 2 stars:

A large, empty rectangular box with a black border, intended for the student to draw two stars. It occupies the lower half of the page.

Name _____


I know my shapes!



This is a _____.

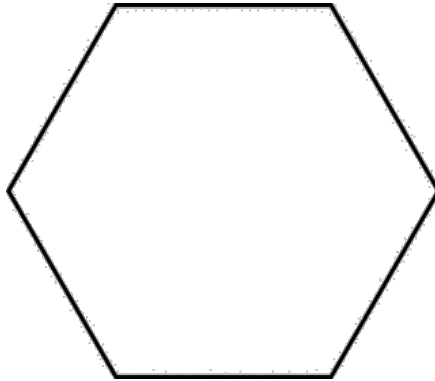
A trapezoid has _____ sides
and _____ points.

I can draw 2 trapezoids:



Name _____

I know my shapes!



This is a _____.

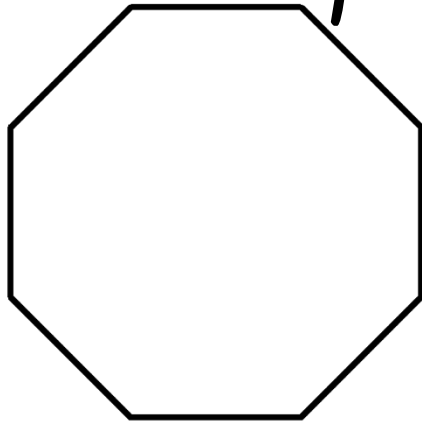
A hexagon has _____ sides and
_____ points.

I can draw 2 hexagons:

A large, empty rectangular box with a black border, intended for the student to draw two hexagons as instructed in the text above.

Name _____

I know my shapes!



This is a _____.

An octagon has _____ sides
and _____ points.

I can draw 2 octagons:

A large, empty rectangular box with a black border, intended for the student to draw two octagons as instructed in the text above.

Credits:

A special thanks to:

www.mycutegraphics.com

MyCuteGraphics

Backgrounds * Clip Art

Animations * Coloring Pages

www.mycutegraphics.com

www.kevinandamanda.com

